

Name _____ Date _____

Houghton Mifflin Math

Grade K Brain Teasers

Time Tale

The clocks show when the children do each of these things, but the clocks are not in order. They do not match the pictures.

The children do each of these things in this order:

1. Go to school
2. Have lunch at school
3. Leave school
4. Eat dinner at 5:00

Write the time under each clock.

What time will the children do each of these things?




Draw a line from each picture to match the clock.

Name _____ Date _____

Houghton Mifflin Math

Grade K Brain Teasers

Time Tale



Copyright © Houghton Mifflin Company. All rights reserved.