

Name \_\_\_\_\_ Date \_\_\_\_\_

## Houghton Mifflin Math

## Grade K Brain Teasers

### Bright Balloons

The graph shows how many balloons of each color are hanging at the party, but someone forgot to write the color names. Use the clues below to label the colors.

- Most of the balloons are yellow.
- There are fewer green balloons than any other color.
- There are 4 red balloons.
- There is 1 more blue balloon than green balloons.

**Color the balloons on the graph.**

**How many balloons are there of each color?**

yellow \_\_\_\_\_

green \_\_\_\_\_

red \_\_\_\_\_















blue \_\_\_\_\_

Name \_\_\_\_\_ Date \_\_\_\_\_

Houghton Mifflin Math

Grade K Brain Teasers

### Bright Balloons

**Color:**

Copyright © Houghton Mifflin Company. All rights reserved.